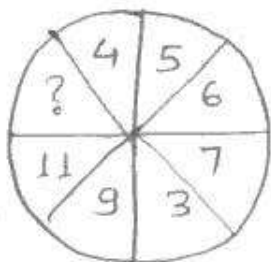


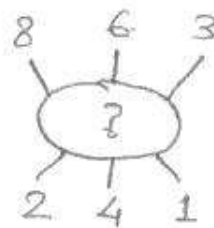
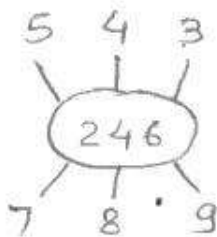
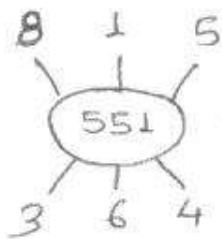
\* Which one will replace the question mark.

Q.1



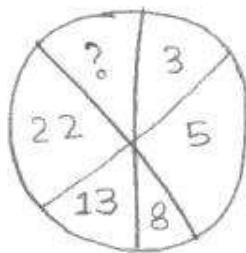
- (A) 13 (B) 14  
(C) 12 (D) 15

Q.2



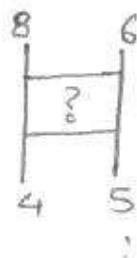
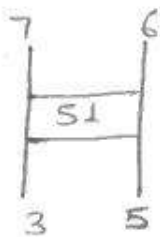
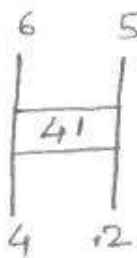
- (A) 262 (B) 626 (C) 622 (D) 631

Q.3



- (A) 45 (B) 29  
(C) 39 (D) 37

Q.4



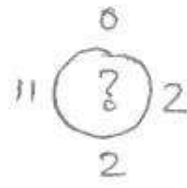
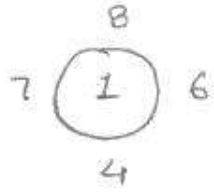
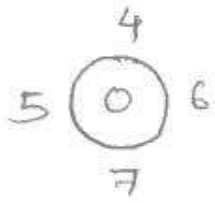
- (A) 59 (B) 60  
(C) 61 (D) 62

Q.5

2	4	0
1	2	4
3	1	3
36	?	91

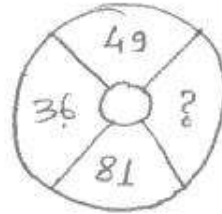
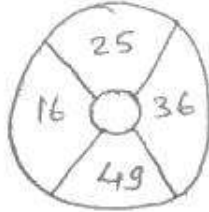
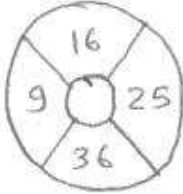
- (A) 25 (B) 59  
(C) 48 (D) 73

Q.6




- (A) 0 (B) 2  
(C) 11 (D) 12

Q.7




- (A) 64 (B) 144  
(C) 169 (D) 25

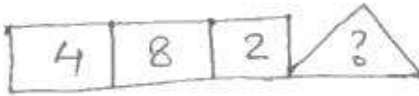
Q.8



- (A) 8 (B) 12



- (C) 16 (D) 20



Q.9

7	4	5
8	7	6
3	3	?
29	19	31

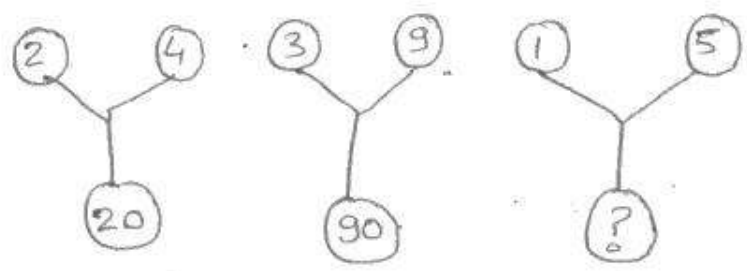
- (A) 3 (B) 5  
(C) 4 (D) 6

Q.10

4	5	6
2	3	7
1	8	3
21	98	?

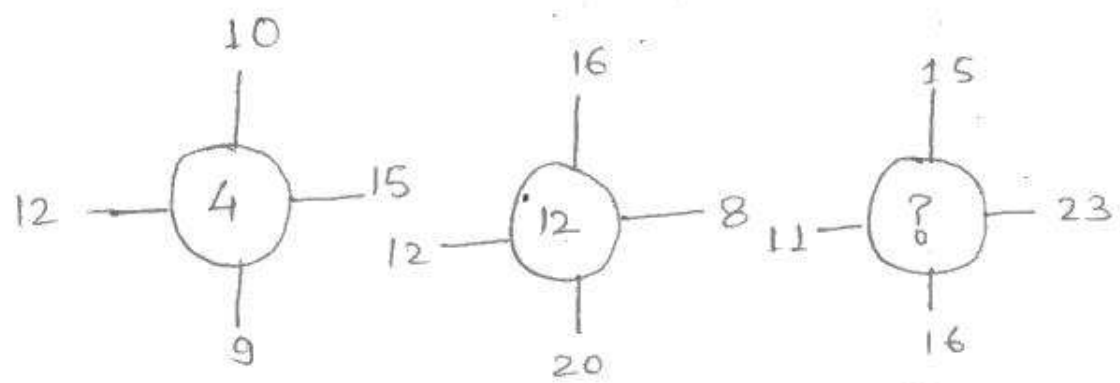
- (A) 94 (B) 76  
(C) 16 (D) 73

Q.11



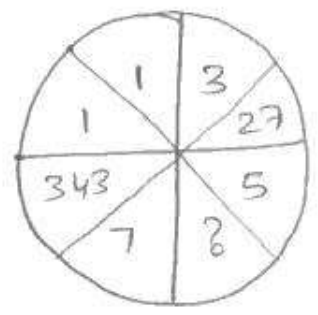
- (A) 24
- (B) 25
- (C) 26
- (D) 20

Q.12



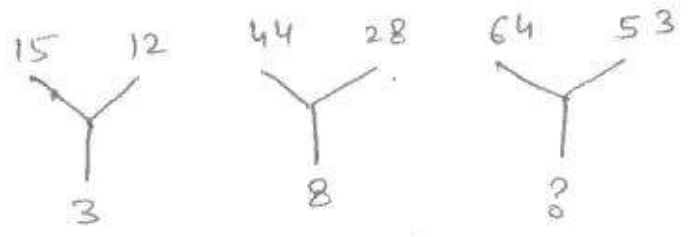
- (A) 11
- (B) 14
- (C) 10
- (D) 12

Q.13



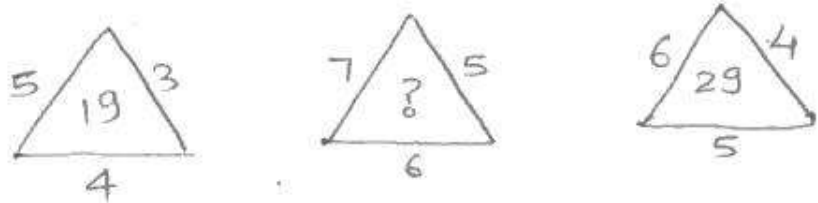
- (A) 625
- (B) 665
- (C) 125
- (D) 025

Q.14



- (A) 30
- (B) 13
- (C) 70
- (D) 118

Q.15



- (A) 25
- (B) 37
- (C) 41
- (D) 47