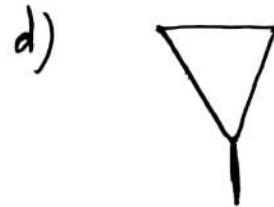
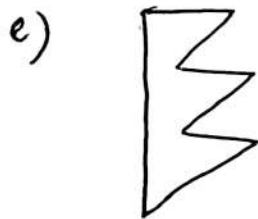
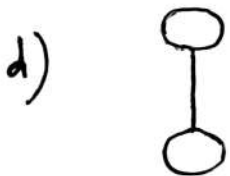
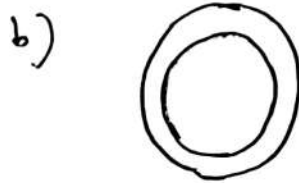
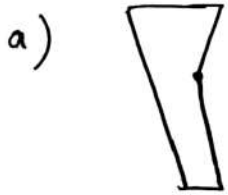


UNDERSTANDING  
QUADRILATERALS

HOMEWORK #1

1) Given here are some figures:



Classify each of them on the basis of following:

i) Not a curve

iv) Polygon

ii) Simple Curve

v) Concave Polygon.

iii) Simple closed curve

2) How many diagonals does each of the following have?

a) A concave quadrilateral

b) A regular Pentagon

c) An isosceles triangle

3) State the name of regular polygon of four sides and six sides.