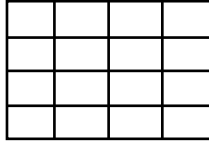


Subject :Mental Ability

HOME WORK SHEET

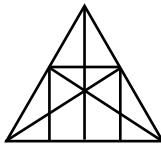
Topic: Counting Figures

1. Count the number of squares in the following figure ?



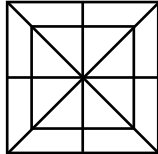
(A) 16 (B) 17 (C) 30 (D) 35

2. Count the number of straight lines and triangles in the following figure ?



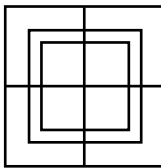
(A) 10 straight lines and 34 triangles  
(B) 9 straight lines and 34 triangles  
(C) 9 straight lines and 36 triangles  
(D) 10 straight lines and 36 triangles

3. Count the number of triangles and squares in the following figure ?



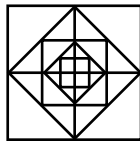
(A) 28 triangles, 10 squares (B) 28 triangles, 8 squares  
(C) 32 triangles, 10 squares (D) 32 triangles, 8 squares

4. How many squares are there in the following figure ?



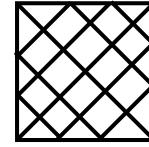
(A) 13 (B) 14 (C) 16 (D) 15

5. How many squares does the figure have ?



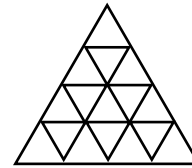
(A) 17 (B) 12 (C) 13 (D) 15

6. How many squares does the following figure have ?




(A) 17 (B) 18 (C) 13 (D) 16

7. How many triangles are there the following figure ?



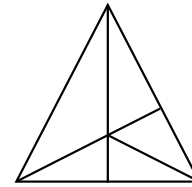
(A) 19 (B) 21 (C) 27 (D) 48

8. How many rectangles are there in the given figure ?



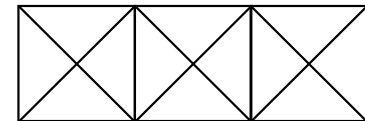
(A) 6 (B) 7 (C) 8 (D) 9

9. How many triangles does the following figure contain ?



(A) 11 (B) 10 (C) 6 (D) 12

10. How many triangles and squares are there in the following figure ?



(A) 28 triangles, 5 squares

(B) 24 triangles, 4 squares

(C) 28 triangles, 4 squares

(D) 24 triangles, 5 squares